



Surname _____

Other Names _____

Centre Number _____

Candidate Number _____

Candidate Signature _____

GCSE

COMBINED SCIENCE: TRILOGY

F

Foundation Tier
Chemistry Paper 1F

8464/C/1F

Thursday 17 May 2018 Morning

Time allowed: 1 hour 15 minutes

For this paper you must have:

- a ruler
- a scientific calculator
- the periodic table (enclosed).

At the top of the page, write your surname and other names, your centre number, your candidate number and add your signature.

[Turn over]



BLANK PAGE



INSTRUCTIONS

- **Use black ink or black ball-point pen.**
- **Answer ALL questions in the spaces provided.**
- **Do all rough work in this book. Cross through any work you do not want to be marked.**
- **In all calculations, show clearly how you work out your answer.**

INFORMATION

- **The maximum mark for this paper is 70.**
- **The marks for questions are shown in brackets.**
- **You are expected to use a calculator where appropriate.**
- **You are reminded of the need for good English and clear presentation in your answers.**

DO NOT TURN OVER UNTIL TOLD TO DO SO



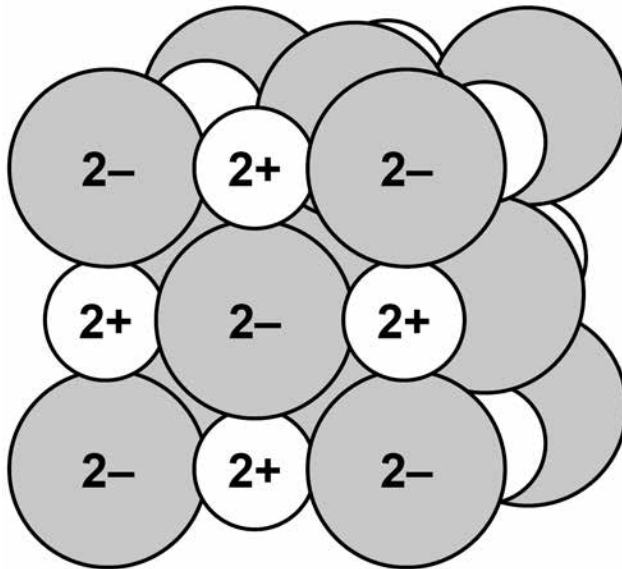
0 1

This question is about structure and bonding.

0 1 . 1

FIGURE 1 shows part of the structure of calcium oxide (CaO).

FIGURE 1



What type of bonding is present in calcium oxide? [1 mark]

Tick ONE box.

Covalent

Ionic

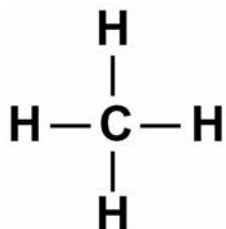
Macromolecular

Metallic



01.2 FIGURE 2 shows a particle of methane (CH₄).

FIGURE 2



What type of particle is present in FIGURE 2?
[1 mark]

Tick ONE box.

An ion

A lattice

A molecule

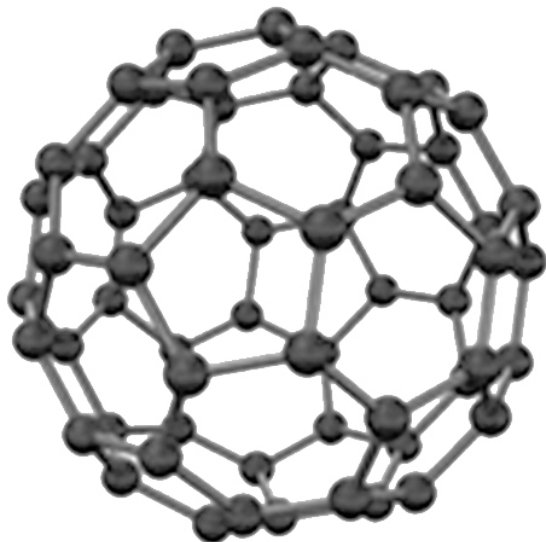
A polymer

[Turn over]



01.3 FIGURE 3 shows the structure of C_{60}

FIGURE 3



Complete the sentence.

Choose the answer from the list below. [1 mark]

- diatomic
- giant ionic
- a fullerene
- giant metallic

The structure of C_{60} is _____



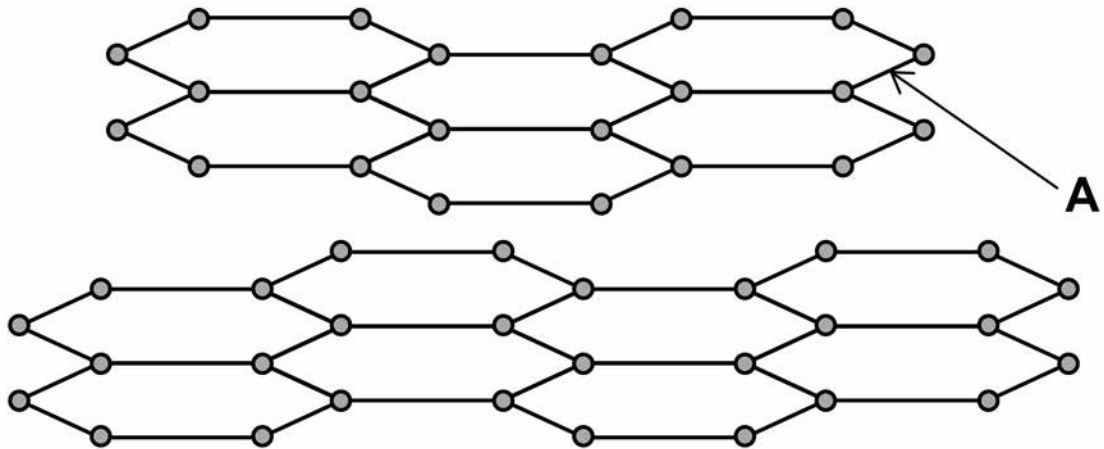
BLANK PAGE

[Turn over]



FIGURE 4 shows the structure of graphite.

FIGURE 4



01.4 What type of bond is labelled A in FIGURE 4?
[1 mark]

Tick ONE box.

covalent

double

ionic

metallic



0 1 . 5 In graphite, each carbon atom forms bonds with other carbon atoms as shown in FIGURE 4

How many electrons does **ONE** carbon atom use to form **ONE** bond? [1 mark]

Tick **ONE** box.

1

2

3

4

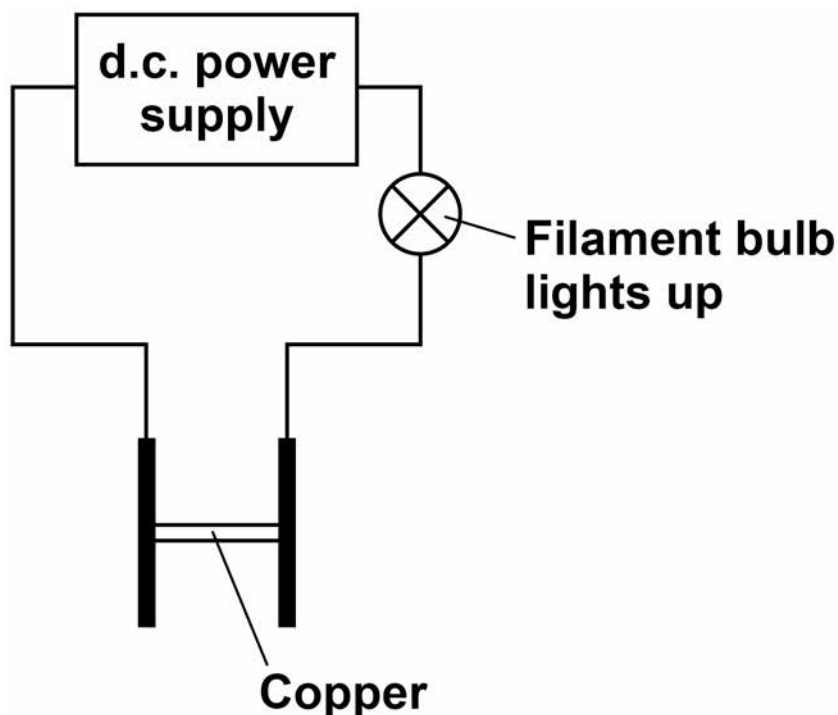
[Turn over]



An electric current is passed through copper.

FIGURE 5 shows the apparatus used.

FIGURE 5



01.6 Complete the sentence.

Choose the answer from the list below.

[1 mark]

- gas
- liquid
- solid
- solution

FIGURE 5 shows that copper conducts

electricity as a _____



01.7 Complete the sentence.

**Choose the answer from the list below.
[1 mark]**

- atoms
- electrons
- ions
- molecules

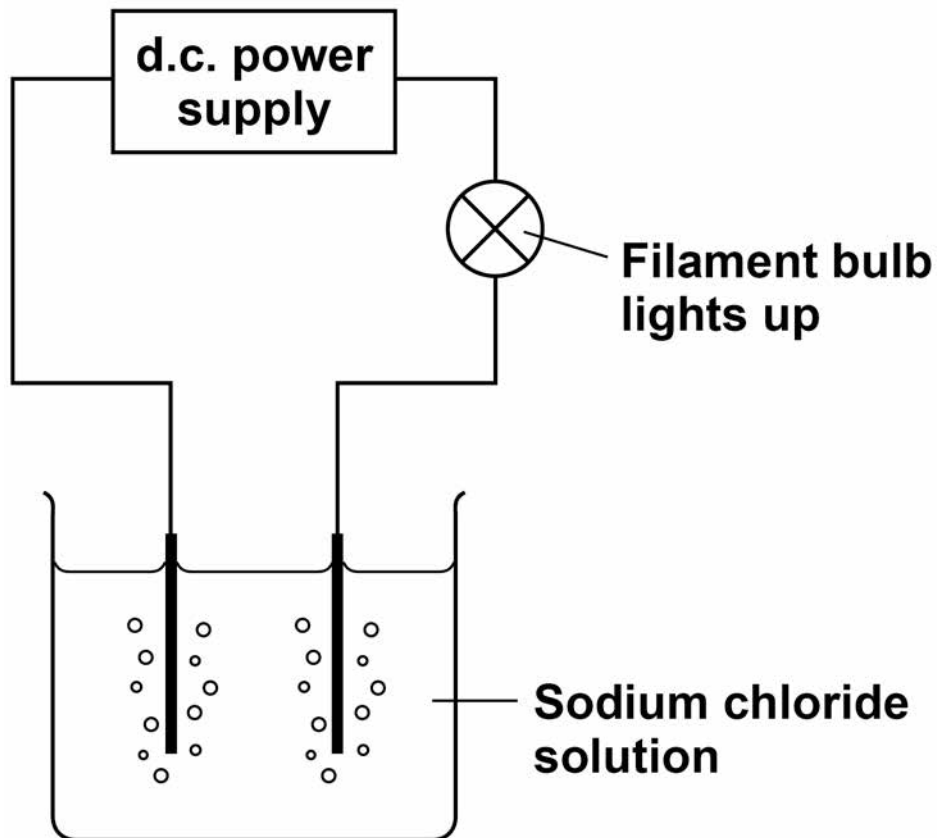
**Copper conducts electricity because of the
movement of delocalised _____.**

[Turn over]



01.8 FIGURE 6 shows the apparatus used to investigate the effect of electricity on sodium chloride solution.

FIGURE 6



Complete the sentence.

Choose the answer from the list below.

[1 mark]

- **dissolved**
- **gaseous**
- **molten**

FIGURE 6 shows that sodium chloride

conducts electricity when _____.

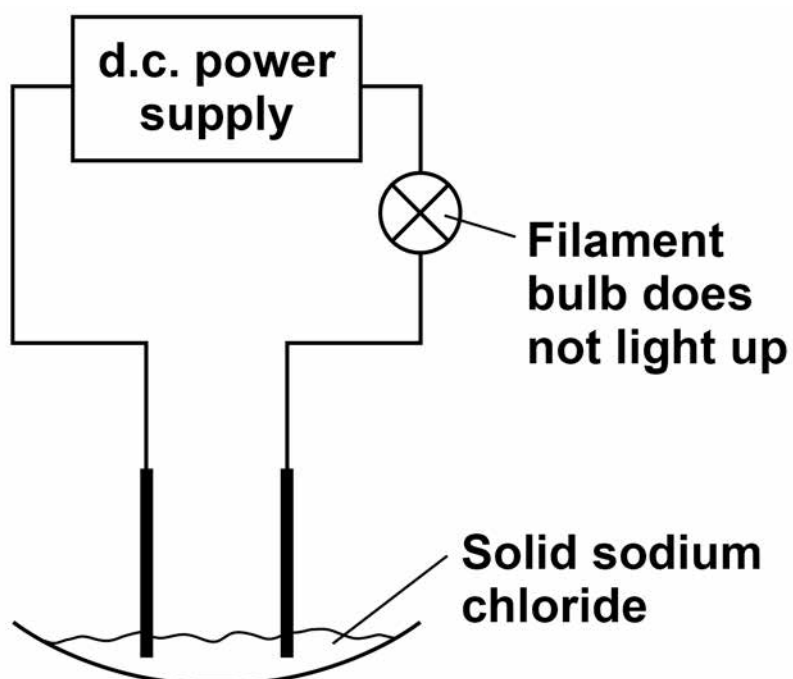
[Turn over]



01.9 Sodium chloride is made up of ions.

FIGURE 7, on pages 14 and 15, shows the apparatus used to investigate the effect of electricity on solid sodium chloride and molten sodium chloride.

FIGURE 7



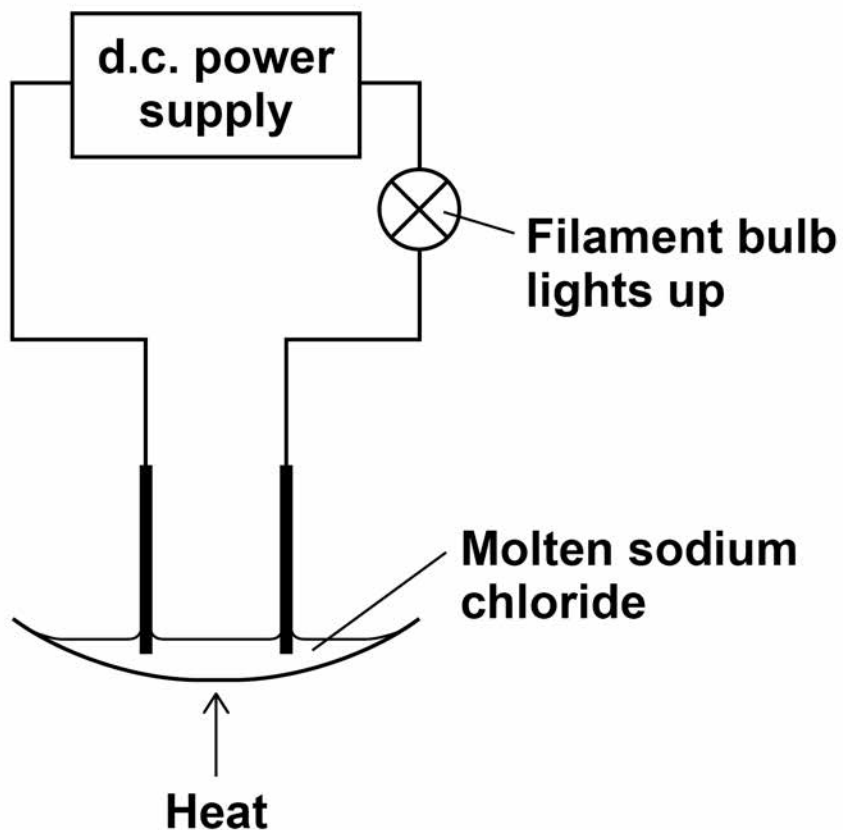


TABLE 1 shows the results.

TABLE 1

	Solid sodium chloride	Molten sodium chloride
Observation	The filament bulb does not light up	The filament bulb lights up
Deduction	Does not conduct electricity	Does conduct electricity

[Turn over]



BLANK PAGE



Draw ONE line from each statement to the correct reason. [2 marks]

STATEMENT**REASON**

Solid sodium chloride does not conduct electricity.

The ions are fixed.

The ions are mobile.

Molten sodium chloride conducts electricity.

The ions are neutral.

The ions are vibrating.

10

[Turn over]



0 2 This question is about the halogens.

0 2 . 1 Which group in the periodic table is known as the halogens? [1 mark]

Tick ONE box.

Group 1

Group 2

Group 7

Group 0



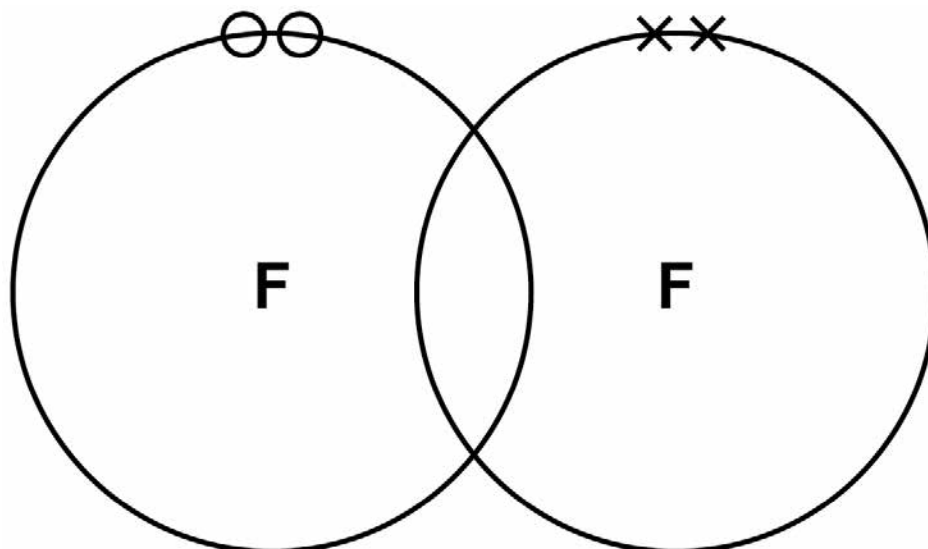
0 2 . 2 A fluorine atom has 7 electrons in the outer shell.

FIGURE 8 shows part of a dot and cross diagram to represent a molecule of fluorine (F_2).

Complete the dot and cross diagram.

You should show only the electrons in the outer shells. [2 marks]

FIGURE 8



[Turn over]



0 2 . 3 Chlorine reacts with potassium bromide solution.

Complete the word equation. [2 marks]

chlorine + potassium bromide

→ _____ + _____

0 2 . 4 What type of reaction happens when chlorine reacts with potassium bromide solution?
[1 mark]

Tick ONE box.

decomposition

displacement

neutralisation

precipitation



02.5 Complete the sentence.

**Choose the answer from the list below.
[1 mark]**

- an atom
- an electron
- a neutron
- a proton

Chlorine is more reactive than bromine.

This is because chlorine gains

_____ **more easily.**

[Turn over]



02.6 How does the size of a chlorine atom compare with the size of a bromine atom?

Complete the sentence.

Choose the answer from the list below.
[1 mark]

- bigger than
- the same size as
- smaller than

A chlorine atom is _____

a bromine atom.



02.7 Give a reason for your answer to question 02.6
[1 mark]

Reason _____

02.8 Fluorine reacts with chlorine to produce ClF_3

Balance the chemical equation for the reaction.
[1 mark]



[Turn over]



03 This question is about acids and bases.

03.1 Which ion is found in all acids? [1 mark]

Tick ONE box.

Cl^-

H^+

Na^+

OH^-

03.2 Zinc nitrate can be produced by reacting an acid and a metal oxide.

Name the acid and the metal oxide used to produce zinc nitrate. [2 marks]

Acid _____

Metal oxide _____



03.3 In an equation, zinc nitrate is written as $\text{Zn}(\text{NO}_3)_2(\text{aq})$.

What does (aq) mean? [1 mark]

Tick ONE box.

Dissolved in water

Insoluble

Not all reacted

Reactant

03.4 The pH of a solution is 8

Some hydrochloric acid is added to the solution.

Suggest the pH of the solution after mixing.
[1 mark]

pH = _____

[Turn over]



03.5 TABLE 2 shows the solubility of three solids in water at room temperature.

TABLE 2

Solid	The mass of the solid that dissolves in 100 cm ³ of water
Phosphorus oxide	50 g
Silicon dioxide	0 g
Sodium hydroxide	100 g

A teacher labelled these three solids A, B and C.

She gave a student the information shown in TABLE 3

TABLE 3

Solid	Observation when added to water	pH of the solid in water
A	colourless solution	14
B	colourless solution	2
C	solid does not dissolve	7



Group 2 metal carbonates break down when heated to produce a metal oxide and a gas.

metal carbonate → metal oxide + gas

0 4 . 2 Name the two products when calcium carbonate (CaCO_3) is heated. [2 marks]

and

[Turn over]



04.3 What type of reaction happens when a compound breaks down? [1 mark]

Tick ONE box.

burning

decomposition

neutralisation

reduction



0 4 . 4 The metal carbonate takes in energy from the surroundings to break down.

What type of reaction takes in energy from the surroundings? [1 mark]

Tick ONE box.

combustion

electrolysis

endothermic

exothermic

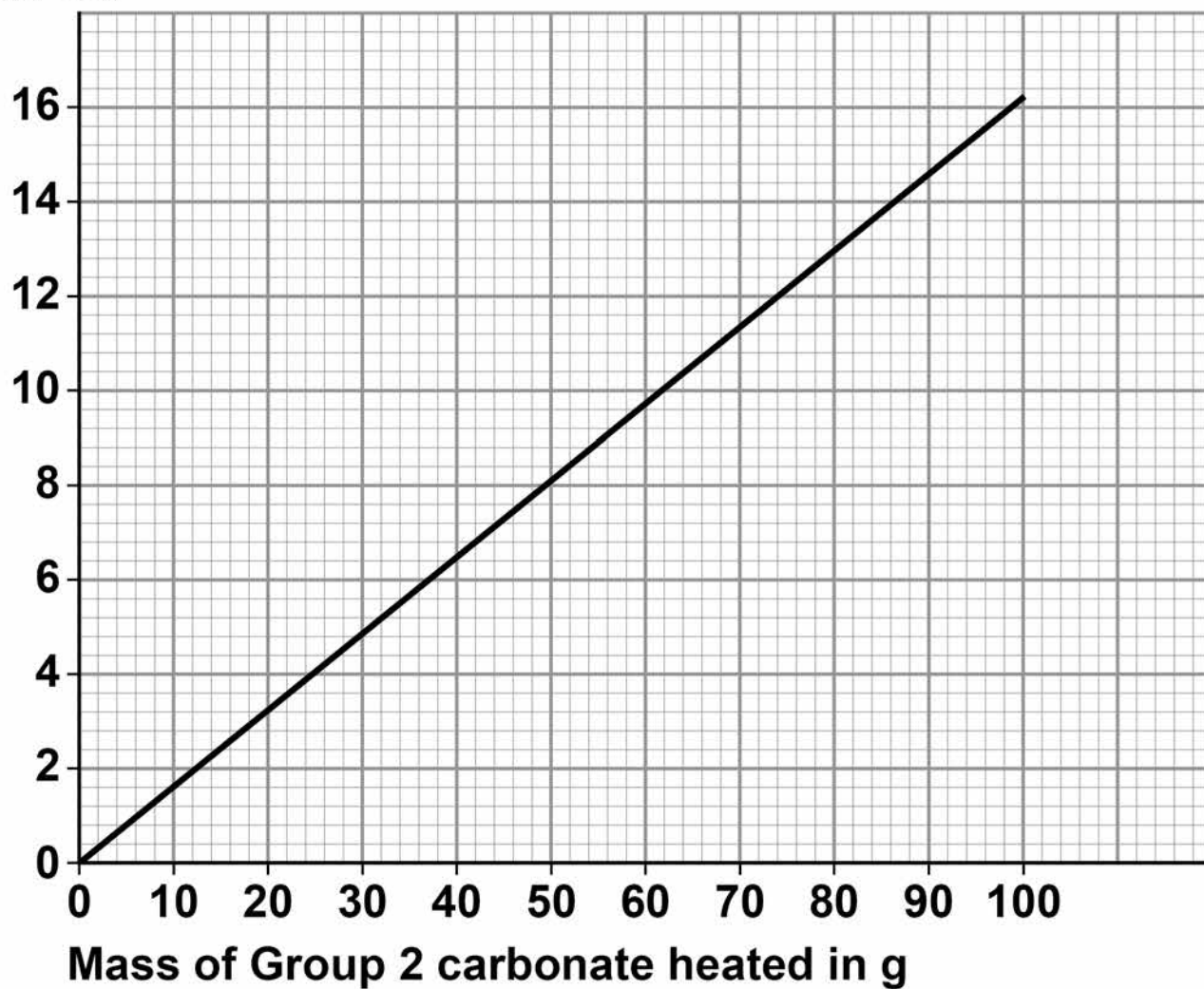
[Turn over]



04.5 FIGURE 10 shows the volume of gas produced when a Group 2 metal carbonate is heated.

FIGURE 10

Volume
of gas
in dm^3



The student collected 5.2 dm³ of gas.

What mass of the Group 2 metal carbonate is heated? [1 mark]

Mass = _____ g

04.6 Calculate the mass of the Group 2 carbonate needed to produce 24 dm³ of gas.

Use your answer from question 04.5 to help you. [2 marks]

Mass = _____ g

[Turn over]



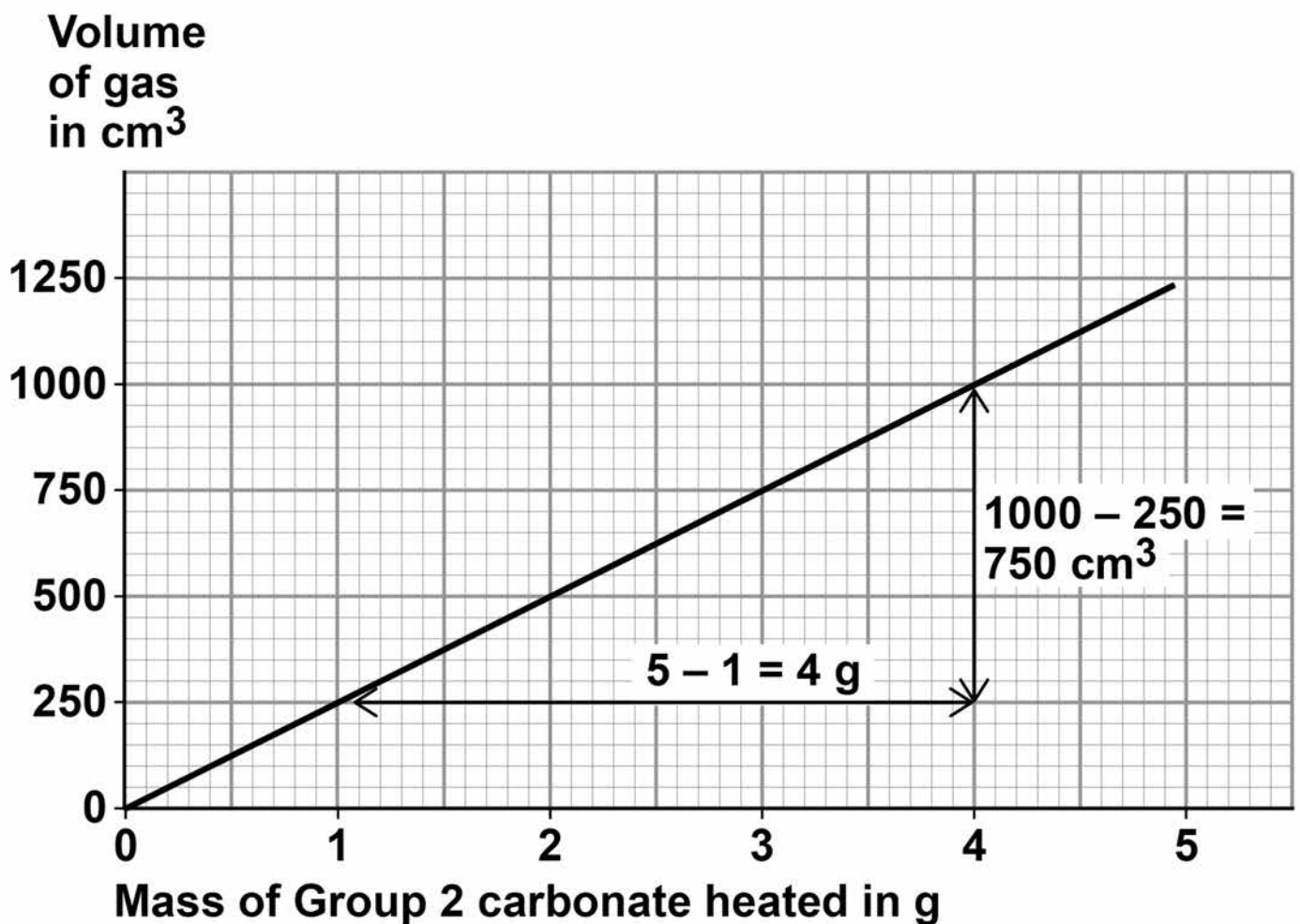
04.7 A student heated different masses of a Group 2 carbonate. The student measured the volume of gas produced.

FIGURE 11 shows a graph of the student's results.

The student calculates the gradient of the line in FIGURE 11

The student makes TWO mistakes.

FIGURE 11



Correct formula for gradient =

Increase in volume of gas

—————
Increase in mass of Group 2 metal carbonate heated

$$\text{Student's calculation} = \frac{4}{750} = 0.00533 \text{ cm}^3 \text{ per g}$$

Identify the TWO mistakes the student makes.

Calculate the correct gradient of the line.

[4 marks]

Mistake 1 _____

Mistake 2 _____

Calculation _____

Gradient = _____ cm^3 per g

[Turn over]



BLANK PAGE



0 4 . 8 A student repeated the experiment with a different Group 2 metal carbonate (XCO_3).

The relative formula mass (M_r) of XCO_3 is 84

Relative atomic masses (A_r): C = 12 O = 16

Calculate the relative atomic mass (A_r) of X.

Name metal X.

Use the periodic table. [4 marks]

Relative atomic mass (A_r) = _____

Metal X is _____

16

[Turn over]



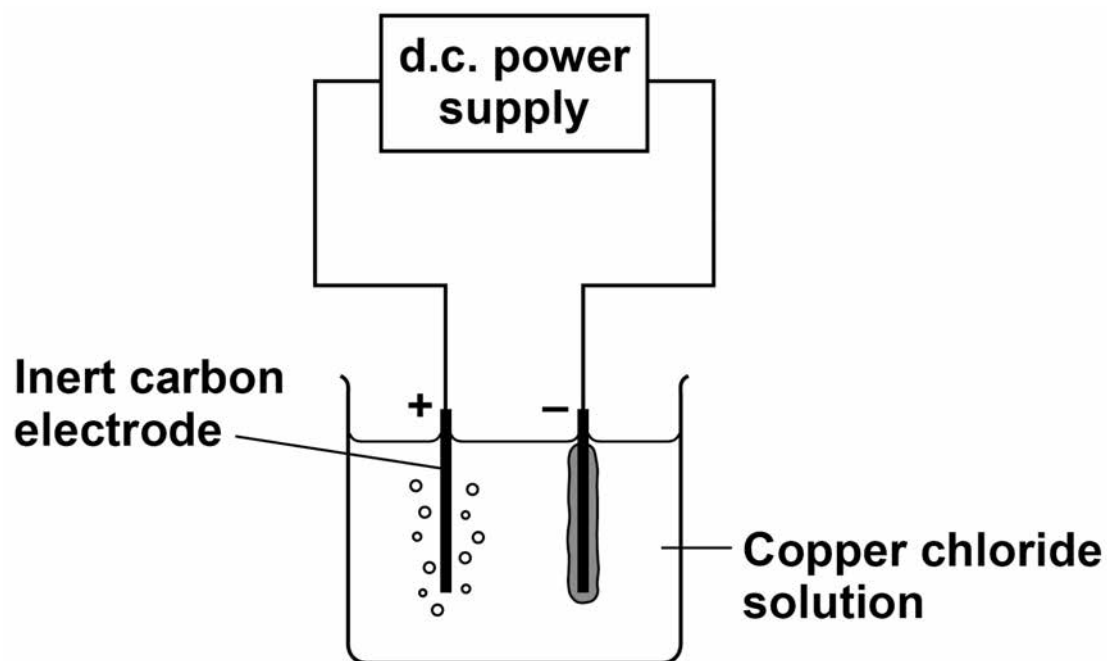
05

This question is about electrolysis.

A student investigates the mass of copper produced during electrolysis of copper chloride solution.

FIGURE 12 shows the apparatus.

FIGURE 12



05.1 Which gas is produced at the positive electrode (anode)? [1 mark]

Tick ONE box.

carbon dioxide

chlorine

hydrogen

oxygen

[Turn over]



BLANK PAGE



05.2 Copper is produced at the negative electrode (cathode).

What does this tell you about the reactivity of copper? [1 mark]

Tick ONE box.

Copper is less reactive than hydrogen

Copper is less reactive than oxygen

Copper is more reactive than carbon

Copper is more reactive than chlorine

[Turn over]



TABLE 4 shows the student's results.

TABLE 4

	Total mass of copper produced in mg			
Time in mins	Experiment 1	Experiment 2	Experiment 3	Mean
1	0.60	0.58	0.62	0.60
2	1.17	1.22	1.21	1.20
4	2.40	2.41	2.39	2.40
5	3.02	X	3.01	3.06



05.3 Determine the MEAN mass of copper produced after 3 minutes.
[1 mark]

Mass = _____ mg

[Turn over]



TABLE 4 shows the student's results.

TABLE 4

	Total mass of copper produced in mg			
Time in mins	Experiment 1	Experiment 2	Experiment 3	Mean
1	0.60	0.58	0.62	0.60
2	1.17	1.22	1.21	1.20
4	2.40	2.41	2.39	2.40
5	3.02	X	3.01	3.06



05.4 Calculate the mass X of copper produced in EXPERIMENT 2 after 5 minutes.

Use TABLE 4 on page 46 [2 marks]

Mass X = _____ mg

[Turn over]



05.5 The copper chloride solution used in the investigation contained 300 grams per dm³ of solid CuCl₂ dissolved in 1 dm³ of water.

The students used 50 cm³ of copper chloride solution in each experiment.

Calculate the mass of solid copper chloride used in each experiment. [3 marks]

8

Mass = _____ g

0 6 This question is about sodium and chlorine.

FIGURE 13 shows the positions of sodium and chlorine in the periodic table.

FIGURE 13

Na																Cl		

0 6 . 1 State ONE difference and ONE similarity in the electronic structure of sodium and of chlorine. [2 marks]

Difference _____

Similarity _____

[Turn over]



06.2 Sodium atoms react with chlorine atoms to produce sodium chloride (NaCl).

Describe what happens when a sodium atom reacts with a chlorine atom.

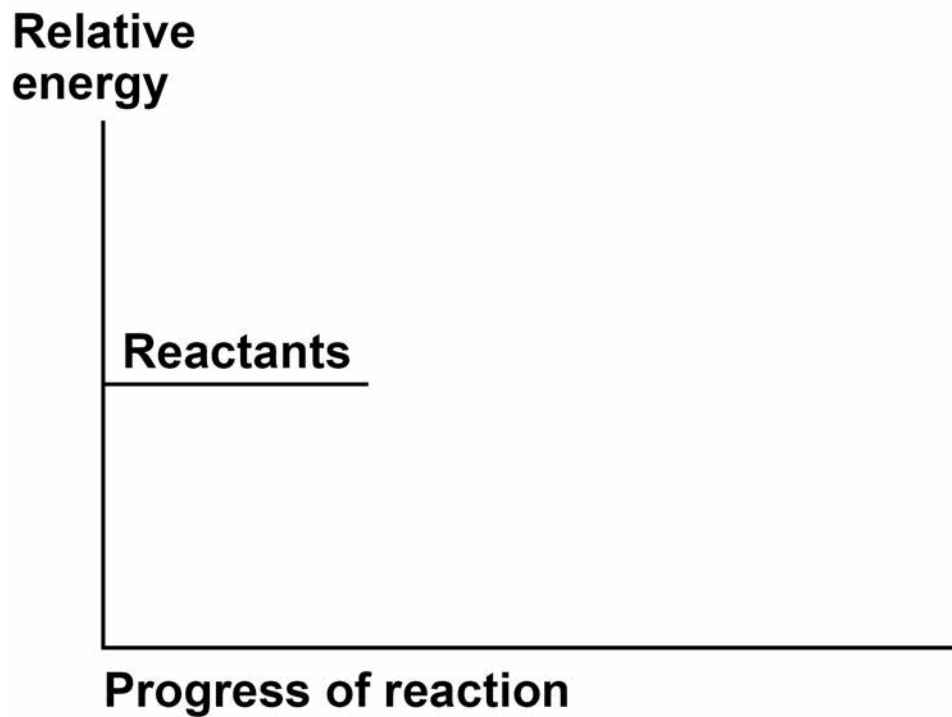
**Write about electron transfer in your answer.
[4 marks]**



06.3 The reaction between sodium and chlorine is an exothermic reaction.

Complete the reaction profile for the reaction between sodium and chlorine. [2 marks]

FIGURE 14



8

[Turn over]



0	7
---	---

A student plans a method to prepare pure crystals of copper sulfate.

The student's method is:

1. Add one spatula of calcium carbonate to dilute hydrochloric acid in a beaker.
2. When the fizzing stops, heat the solution with a Bunsen burner until all the liquid is gone.

The method contains several errors and does not produce copper sulfate crystals.

Explain the improvements the student should make to the method so that pure crystals of copper sulfate are produced. [6 marks]



END OF QUESTIONS



There are no questions printed on this page

For Examiner's Use	
Question	Mark
1	
2	
3	
4	
5	
6	
7	
TOTAL	

Copyright information

For confidentiality purposes, from the November 2015 examination series, acknowledgements of third party copyright material will be published in a separate booklet rather than including them on the examination paper or support materials. This booklet is published after each examination series and is available for free download from www.aqa.org.uk after the live examination series.

Permission to reproduce all copyright material has been applied for. In some cases, efforts to contact copyright-holders may have been unsuccessful and AQA will be happy to rectify any omissions of acknowledgements. If you have any queries please contact the Copyright Team, AQA, Stag Hill House, Guildford, GU2 7XJ.

Copyright © 2018 AQA and its licensors. All rights reserved.

IB/M/Jun18/NC/8464/C/1F/E4

